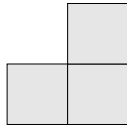


# Odd and Even Numbers

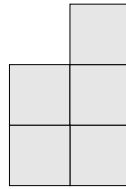
Can you complete the patterns?



1



3



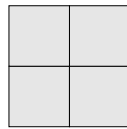
5

7

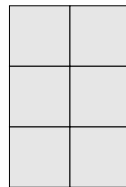
9



2



4



6

8

10

Put a circle round the odd numbers:

2

5

7

9

6

Put a circle round the even numbers:

3

4

9

8

7

1

Can you sort these numbers into odd and even groups?

9

6

2

5

7

1

0

3

8

4

Odd

Even